

CBSE Paper 2020 Math Delhi (Set 3)

General Instructions:

Read the following instructions very carefully and strictly follow them :

(i) This question paper comprises **four** sections – **A, B, C** and **D**.

This question paper carries **36** questions. **All** questions are compulsory.

(ii) **Section A** – Question no. **1** to **20** comprises of **20** questions of **one** mark each.

(iii) **Section B** – Question no. **21** to **26** comprises of **6** questions of **two** marks each.

(iv) **Section C** – Question no. **27** to **32** comprises of **6** questions of **four** marks each.

(v) **Section D** – Question no. **33** to **36** comprises of **4** questions of **six** marks each.

(vi) There is no overall choice in the question paper. However, an internal choice has been provided in **3** questions of one mark, **2** questions of two marks, **2** questions of four marks and **2** questions of six marks. Only one of the choices in such questions have to be attempted.

(vii) In addition to this, separate instructions are given with each section and question, wherever necessary.

(viii) Use of calculators is not permitted.

Question 1

If A is a skew symmetric matrix of order 3, then the value of $|A|$ is

(a) 3

(b) 0

(c) 9

(d) 27

Solution:

Given: A is a skew symmetric matrix of order 3.

We know

$$|A'| = |A| \quad (\text{where } A' \text{ stands for } A \text{ transpose}) \quad \dots\dots (1)$$

In a skew symmetric matrix,

$$\Rightarrow A' = -A$$

$$\Rightarrow |A'| = (-1)^n |A|$$

$$\Rightarrow |A'| = (-1)^3 |A| \quad (\text{Since } n = 3)$$

$$\Rightarrow |A'| = -|A| \quad \dots\dots (2)$$

From (1) and (2), we get

$$2|A| = 0$$

$$\Rightarrow |A| = 0$$

Hence, the correct answer is option (b).

Question 2

If \hat{i} , \hat{j} , \hat{k} are unit vectors along three mutually perpendicular directions, then

- (a) $\hat{i} \cdot \hat{j} = 1$
- (b) $\hat{i} \times \hat{j} = 1$
- (c) $\hat{i} \cdot \hat{k} = 0$
- (d) $\hat{i} \times \hat{k} = 0$

Solution:

Given three unit vectors \hat{i} , \hat{j} , \hat{k} are mutually perpendicular.

Therefore, the angle between them will be right angle.

Consider

$$\hat{i} \cdot \hat{k} = |\hat{i}| |\hat{k}| \cos 90^\circ = 0$$

Hence, the correct answer is option (c).

Question 3

A card is picked at random from a pack of 52 playing cards. Given that picked card is a queen, the probability of this card to be a card of spade is

- (a) 1/3
- (b) 4/13
- (c) 1/4
- (d) 1/2

Solution:

Given that the picked card is a queen.

Therefore,

$$\text{Total number of outcomes} = \text{Total number of queens} = 4$$

Since only one queen exists of spade.

Therefore,

$$\text{Required Probability} = \frac{\text{Total number of favorable outcomes}}{\text{Total outcomes}} = \frac{1}{4}$$

Hence, the correct answer is option (c).

Question 4

If A is a 3×3 matrix such that $|A| = 8$, then $|3A|$ equals.

- (a) 8
- (b) 24
- (c) 72
- (d) 216

Solution:

Given that A is a 3×3 matrix and $|A| = 8$.

We know that If $A = [a_{ij}]_{3 \times 3}$ then $|k.A| = k^3 |A|$

When $k = 3$, then

$$|3.A| = 3^3 |A| = 27 |A| = 27 \times 8 = 216$$

Hence, the correct answer is option (d).

Question 5

$\int x^2 e^{x^3} dx$ equals

- (a) $\frac{1}{3} e^{x^3} + C$
- (b) $\frac{1}{3} e^{x^4} + C$
- (c) $\frac{1}{2} e^{x^3} + C$
- (d) $\frac{1}{2} e^{x^2} + C$

Solution:

The given integral is $I = \int x^2 e^{x^3} dx$.

Let $x^3 = t$

$$\Rightarrow 3x^2 dx = dt$$

We get

$$I = \frac{1}{3} \int e^t dt$$

$$= \frac{1}{3} e^t + c \quad (\because \int e^t dt = e^t + c)$$

$$= \frac{1}{3} e^{x^3} + c$$

Hence, the correct answer is option (a).

Question 6

If $y = \log_e \left(\frac{x^2}{e^2} \right)$, then $\frac{d^2y}{dx^2}$ equals

- (a) $-\frac{1}{x}$
- (b) $-\frac{1}{x^2}$
- (c) $\frac{2}{x^2}$
- (d) $-\frac{2}{x^2}$

Solution:

Given: $y = \log_e \left(\frac{x^2}{e^2} \right)$

Rewriting the given equation

$$y = \log_e x^2 - \log_e e^2$$

$$\Rightarrow y = 2 \log_e x - 2 \quad (\because \log_e e = 1)$$

Differentiating both sides of the above equation w.r.t. x , we get

$$\frac{dy}{dx} = 2 \times \frac{1}{x} - 0$$

$$\Rightarrow \frac{dy}{dx} = \frac{2}{x}$$

Differentiating again w.r.t. x , we get

$$\frac{d^2y}{dx^2} = 2 \times \left(\frac{-1}{x^2} \right)$$

$$\Rightarrow \frac{d^2y}{dx^2} = \frac{-2}{x^2}$$

Hence, the correct answer is option (d).

Question 7

A die is thrown once. Let A be the event that the number obtained is greater than 3. Let B be the event that the number obtained is less than 5. Then $P(A \cup B)$ is

- (a) $\frac{2}{5}$
- (b) $\frac{3}{5}$
- (c) 0
- (d) 1

Solution:

A: Number obtained is greater than 3

$$A = \{4, 5, 6\}$$

$$n(A) = 3$$

$$P(A) = \frac{3}{6}$$

B: Number obtained is less than 5

$$A = \{1, 2, 3, 4\}$$

$$n(A) = 4$$

$$P(B) = \frac{4}{6}$$

$A \cap B$: Number obtained is greater than 3 and less than 5

$$A \cap B = \{4\}$$

$$P(A \cap B) = \frac{1}{6}$$

We know

$$P(A \cup B) = P(A) + P(B) - P(A \cap B)$$

$$\Rightarrow P(A \cup B) = \frac{3}{6} + \frac{4}{6} - \frac{1}{6} = 1$$

Hence, the correct answer is option (d).

Question 8

ABCD is a rhombus whose diagonals intersect at E. Then $\vec{EA} + \vec{EB} + \vec{EC} + \vec{ED}$ equals

(a) $\vec{0}$

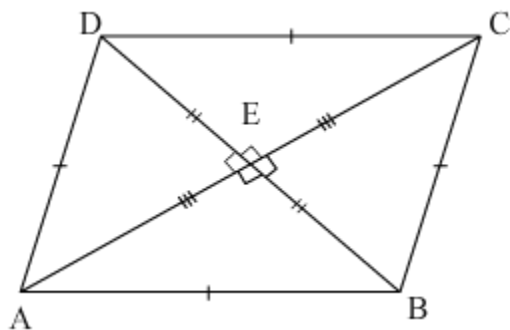
(b) \vec{AD}

(c) $2\vec{BC}$

(d) $2\vec{AD}$

Solution:

Given: ABCD is a rhombus and its diagonal intersects at E.



According to the properties of rhombus,

$$|\vec{AB}| = |\vec{BC}| = |\vec{CD}| = |\vec{DA}|$$

$$\vec{EA} = -\vec{EC}$$

$$\vec{ED} = -\vec{EB}$$

Consider the given expression

$$\vec{EA} + \vec{EB} + \vec{EC} + \vec{ED}$$

$$= -\vec{EC} + \vec{EB} + \vec{EC} - \vec{EB}$$

$$\left(\because \vec{EA} = -\vec{EC} \text{ and } \vec{ED} = -\vec{EB} \right)$$

$$= 0$$

Hence, the correct answer is option (a).

Question 9

The distance of the origin (0, 0, 0) from the plane $-2x + 6y - 3z = -7$ is

- (a) 1 unit
- (b) $\sqrt{2}$ units
- (c) $2\sqrt{2}$ units
- (d) 3 units

Solution:

The equation of plane is given to be $-2x + 6y - 3z = -7$ i.e. $-2x + 6y - 3z + 7 = 0$.

The distance of origin (0, 0, 0) from this plane is given by

$$p = \left| \frac{-2(0) + 6(0) - 3(0) + 7}{\sqrt{(-2)^2 + (6)^2 + (-3)^2}} \right|$$

$$= \left| \frac{7}{7} \right|$$

$$= 1$$

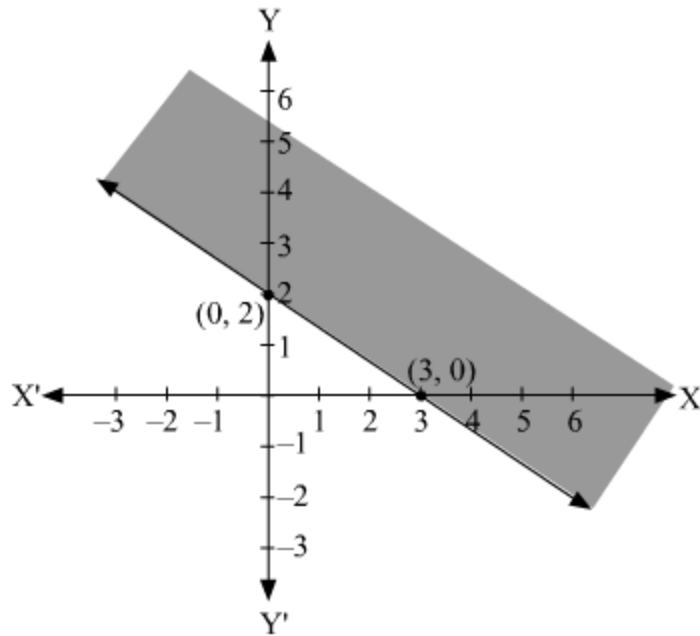
Hence, the correct answer is option (a).

Question 10

The graph of the inequality $2x + 3y > 6$ is

- (a) half plane that contains the origin.
- (b) half plane that neither contains the origin nor the points of the line $2x + 3y = 6$.
- (c) whole XOY – plane excluding the points on the line $2x + 3y = 6$.
- (d) entire XOY plane.

Solution:



From the graph it can be clearly seen that the graph of the inequality $2x + 3y > 6$ is a half plane that neither contains the origin nor the points of the line $2x + 3y = 6$. Hence, the correct answer is option (b).

Question 11

Fill in the blank.

If A and B are square matrices each of order 3 and $|A| = 5$, $|B| = 3$, then the value of $|3AB|$ is _____

Solution:

Given: $|A| = 5$ and $|B| = 3$

Therefore, $|AB| = |A| |B| = 5 \times 3 = 15$

Now, $|3AB| = 3^3 |AB| = 27 \times 15 = 405$

If A and B are square matrices each of order 3 and $|A| = 5$, $|B| = 3$, then the value of $|3AB|$ is 405.

Question 12

Fill in the blank.

The least value of the function $f(x) = ax + \frac{b}{x}$ ($a > 0$, $b > 0$, $x > 0$) is _____.

Solution:

Given: $f(x) = ax + \frac{b}{x}$ ($a > 0, b > 0, x > 0$)

As a, b and $x > 0$

We can use $AM \geq GM$

$$\frac{ax + \frac{b}{x}}{2} \geq \sqrt{ax \times \frac{b}{x}}$$

$$\frac{ax + \frac{b}{x}}{2} \geq \sqrt{ab}$$

$$ax + \frac{b}{x} \geq 2\sqrt{ab}$$

Hence, the minimum value of $f(x)$ is $2\sqrt{ab}$.

Question 13

Fill in the blank.

The vector equation of a line which passes through the points $(3, 4, -7)$ and $(1, -1, 6)$ is _____.

OR

Fill in the blank.

The line of shortest distance between two skew lines is _____ to both the lines.

Solution:

Let the two vectors be $\vec{a} = 3\hat{i} + 4\hat{j} - 7\hat{k}$ and $\vec{b} = \hat{i} - \hat{j} + 6\hat{k}$.

Now, the vector equation of a line passing through two points whose position vectors are \vec{a} and \vec{b} is given by

$$\begin{aligned}\vec{r} &= \vec{a} + \lambda(\vec{b} - \vec{a}) \\ &= (3\hat{i} + 4\hat{j} - 7\hat{k}) + \lambda[(\hat{i} - \hat{j} + 6\hat{k}) - (3\hat{i} + 4\hat{j} - 7\hat{k})] \\ &= (3\hat{i} + 4\hat{j} - 7\hat{k}) + \lambda(-2\hat{i} - 5\hat{j} + 13\hat{k}) \\ &= (3 - 2\lambda)\hat{i} + (4 - 5\lambda)\hat{j} + (-7 + 13\lambda)\hat{k}\end{aligned}$$

OR

The line of shortest distance between two skew lines is perpendicular to both the lines.

Question 14

Fill in the blank.

The integrating factor of the differential equation $x \frac{dy}{dx} + 2y = x^2$ is _____.

OR

Fill in the blank.

The degree of the differential equation $1 + \left(\frac{dy}{dx}\right)^2 = x$ is _____.

Solution:

The given differential equation is

$$x \frac{dy}{dx} + 2y = x^2$$

$$\Rightarrow \frac{dy}{dx} + \left(\frac{2}{x}\right)y = x$$

Which is of the form $\frac{dy}{dx} + Py = Q$

Hence, the integrating factor is $e^{\int P dx} = e^{\int \frac{2}{x} dx} = e^{2 \ln x} = e^{\ln x^2} = x^2$
OR

The given differential equation is $1 + \left(\frac{dy}{dx}\right)^2 = x$.

Since the highest order derivative involved in the given differential equation is $\frac{dy}{dx}$ and its power is 2. So, the degree of the given differential equation is 2.

Question 15

Fill in the blank.

A relation in a set A is called _____ relation, if each element of A is related to itself.

Solution:

Every relation in a set A is called reflexive relation, if each element of A is related to itself.

For example, if $A = \{p, q, r\}$ then $R = \{(p,p), (q,q), (r,r), (p,r)\}$ is a reflexive relation.

Question 16

Find the cofactors of all the elements of $\begin{bmatrix} 1 & -2 \\ 4 & 3 \end{bmatrix}$.

Solution:

Given: $\begin{bmatrix} 1 & -2 \\ 4 & 3 \end{bmatrix}$

Cofactor of 1 = 3

Cofactor of -2 = -4

Cofactor of 4 = -(-2) = 2

Cofactor of 3 = 1

Question 17

Let $f(x) = x|x|$, for all $x \in \mathbb{R}$ check its differentiability at $x = 0$.

Solution:

Given: $f(x) = x|x|$, for all $x \in \mathbb{R}$

As we know,

A function is differentiable, if $LHD = RHD$

A function is nondifferentiable, if $LHD \neq RHD$

LHD

$$\begin{aligned} &= \lim_{h \rightarrow 0} \frac{f(0+h) - f(0)}{h} \\ &= \lim_{h \rightarrow 0} \frac{h|h| - 0}{h} \quad [\because f(0) = 0] \\ &= \lim_{h \rightarrow 0} h \\ &= 0 \end{aligned}$$

RHD

$$\begin{aligned} &= \lim_{h \rightarrow 0} \frac{f(0-h) - f(0)}{-h} \\ &= \lim_{h \rightarrow 0} \frac{-h|-h| - 0}{-h} \quad [\because f(0) = 0] \\ &= \lim_{h \rightarrow 0} h \\ &= 0 \end{aligned}$$

Since, $LHD = RHD$

Hence, the function is differentiable at $x = 0$.

Question 18

Find the value of $\sin^{-1} \left[\sin \left(-\frac{17\pi}{8} \right) \right]$.

Solution:

Consider the given expression

$$\begin{aligned} \sin^{-1} \left[\sin \left(-\frac{17\pi}{8} \right) \right] &= \sin^{-1} \left(-\sin \frac{17\pi}{8} \right) \\ &= \sin^{-1} \left[-\sin \left(2\pi + \frac{\pi}{8} \right) \right] \\ &= \sin^{-1} \left(-\sin \frac{\pi}{8} \right) \\ &= \sin^{-1} \left[\sin \left(-\frac{\pi}{8} \right) \right] \\ &= -\frac{\pi}{8} \end{aligned}$$

Question 19

Find the value of $\int_1^4 |x - 5| dx$.

Solution:

$$I = \int_1^4 |x - 5| dx$$

$$I = \int_1^4 -(x - 5) dx$$

$$I = \int_1^4 (5 - x) dx$$

$$I = \left[5x - \frac{x^2}{2} \right]_1^4$$

$$I = \left(5 \times 4 - \frac{4^2}{2} \right) - \left(5 \times 1 - \frac{1^2}{2} \right)$$

$$I = 12 - \frac{9}{2} = \frac{15}{2}$$

Question 20

If $f(x) = x^4 - 10$, then find the approximate value of $f(2.1)$.

OR

Find the slope of the tangent to the curve $y = 2 \sin^2(3x)$ at $x = \pi/6$.

Solution:

Given: $y = f(x) = x^4 - 10$

$$\therefore \frac{dy}{dx} = 4x^3$$

We need to find $f(2.1)$

Let $x = 2$ and $\Delta x = 0.1$

Therefore, $\Delta y = f(x + \Delta x) - f(x)$

$$= f(2.1) - f(2)$$

$$= f(2.1) - (2^4 - 10)$$

$$= f(2.1) - 6$$

$$\Rightarrow f(2.1) = \Delta y + 6 \dots (1)$$

Now, $\Delta y = \frac{dy}{dx} \Delta x = 4(2)^3 \times (0.1) = 32 \times (0.1) = 3.2$

From (1),

$$f(2.1) = 3.2 + 6 = 9.2$$

Hence, the approximate value of $f(2.1)$ using derivative is 9.2.

OR

Given curve is $y = 2 \sin^2(3x)$

Therefore, $\frac{dy}{dx} = 12 \sin(3x) \cos(3x) = 6 \sin(6x)$

At $x = \frac{\pi}{6}$, $\frac{dy}{dx} = 6 \sin \pi = 0$

Hence, the slope of the tangent at $x = \frac{\pi}{6}$ is 0.

Question 21

Find $\int \frac{x+1}{(x+2)(x+3)} dx$.

Solution:

$$\begin{aligned}\text{Let } I &= \int \frac{(x+1)}{(x+2)(x+3)} dx \\ \Rightarrow I &= \int \frac{x+1}{x^2+5x+6} dx \\ \Rightarrow I &= \frac{1}{2} \int \frac{2(x+1)+3-3}{x^2+5x+6} dx \\ \Rightarrow I &= \frac{1}{2} \int \frac{2x+5}{x^2+5x+6} dx - \frac{3}{2} \int \frac{1}{(x+2)(x+3)} dx \\ \Rightarrow I &= \log \sqrt{x^2+5x+6} + C_1 - \frac{3}{2} \int \left(\frac{1}{x+2} - \frac{1}{x+3} \right) dx \\ \Rightarrow I &= \log \sqrt{x^2+5x+6} + C_1 - \frac{3}{2} [\log(x+2) - \log(x+3)] + C_2 \\ \Rightarrow I &= \log \sqrt{x^2+5x+6} - \frac{3}{2} \log \frac{(x+2)}{(x+3)} + C \quad \text{where } C = C_1 + C_2\end{aligned}$$

Question 22

If $f(x) = \frac{4x+3}{6x-4}$, $x \neq \frac{2}{3}$, then show that $(f \circ f)(x) = x$, for all $x \neq \frac{2}{3}$. Also, write inverse of f .

OR

Check if the relation R in the set \mathbb{R} of real numbers defined as $R = \{(a, b) : a < b\}$ is (i) symmetric, (ii) transitive

Solution:

$$\begin{aligned}\text{Given, } f(x) &= \frac{4x+3}{6x-4}, \quad x \neq \frac{2}{3} \\ (f \circ f)(x) &= \frac{4\left(\frac{4x+3}{6x-4}\right)+3}{6\left(\frac{4x+3}{6x-4}\right)-4} \\ \Rightarrow (f \circ f)(x) &= \frac{\frac{16x+12+18x-12}{6x-4}}{\frac{24x+18-24x+16}{6x-4}} \\ \Rightarrow (f \circ f)(x) &= \frac{34x}{34} = x\end{aligned}$$

Hence proved.

To find inverse of the given function,

$$\text{Let } y = \frac{4x+3}{6x-4}$$

$$\Rightarrow y(6x-4) = 4x+3$$

$$\Rightarrow 6xy - 4y = 4x + 3$$

$$\Rightarrow 6xy - 4x = 3 + 4y$$

$$\Rightarrow x(6y-4) = 4y+3$$

$$\Rightarrow x = \frac{4y+3}{6y-4}$$

$$\text{Therefore, } f^{-1}(x) = \frac{4x+3}{6x-4}, \quad x \neq \frac{2}{3}$$

OR

We have,

$$R = \{(a, b) : a < b\}, \quad \text{where } a, b \in \mathbb{R}$$

(i) Symmetry

We observe that $(2, 3) \in R$ but $(3, 2) \notin R$.

So, R is not symmetric.

(ii) Transitivity

Let $(a, b) \in R$ and $(b, c) \in R$. Then,

$$\Rightarrow a < b \text{ and } b < c$$

$$\Rightarrow a < c$$

$$\Rightarrow (a, c) \in R$$

So, R is transitive.

Question 23

Given two independent events A and B such that $P(A) = 0.3$ and $P(B) = 0.6$, find $P(A' \cap B')$

Solution:

It is given that $P(A) = 0.3$ and $P(B) = 0.6$

Also, A and B are independent events.

$$\therefore P(A \text{ and } B) = P(A) \cdot P(B)$$

$$\Rightarrow P(A \cap B) = 0.3 \times 0.6 = 0.18$$

And, $P(A \cup B)$

$$= P(A) + P(B) - P(A \cap B)$$

$$= 0.3 + 0.6 - 0.18$$

$$= 0.72$$

$$\begin{aligned}
&\text{So, } P(A' \cap B') \\
&= P((A \cup B)') \\
&= 1 - P(A \cup B) \\
&= 1 - 0.72 \\
&= 0.28
\end{aligned}$$

Question 24

Evaluate $\int_1^2 \left[\frac{1}{x} - \frac{1}{2x^2} \right] e^{2x} dx$.

Solution:

$$\int_1^2 \left(\frac{1}{x} - \frac{1}{2x^2} \right) e^{2x} dx$$

Let $2x = t \Rightarrow 2dx = dt$

When $x = 1$, $t = 2$ and when $x = 2$, $t = 4$

$$\begin{aligned}
\therefore \int_1^2 \left(\frac{1}{x} - \frac{1}{2x^2} \right) e^{2x} dx &= \frac{1}{2} \int_2^4 \left(\frac{2}{t} - \frac{2}{t^2} \right) e^t dt \\
&= \int_2^4 \left(\frac{1}{t} - \frac{1}{t^2} \right) e^t dt
\end{aligned}$$

Let $\frac{1}{t} = f(t)$

Then, $f'(t) = -\frac{1}{t^2}$

$$\begin{aligned}
\Rightarrow \int_2^4 \left(\frac{1}{t} - \frac{1}{t^2} \right) e^t dt &= \int_2^4 e^t [f(t) + f'(t)] dt \\
&= [e^t f(t)]_2^4
\end{aligned}$$

$$\begin{aligned}
&= \left[\frac{e^t}{t} \right]_2^4 \\
&= \frac{e^4}{4} - \frac{e^2}{2} \\
&= \frac{e^2(e^2 - 2)}{4}
\end{aligned}$$

Question 25

If $x = a \cos \theta$; $y = b \sin \theta$, then find $\frac{d^2y}{dx^2}$.

Find the differential of $\sin^2 x$ w.r.t. $e^{\cos x}$.

Solution:

$$\text{Given } x = a \cos \theta, y = b \sin \theta$$

Differentiating w.r.t. θ , we get

$$\frac{dx}{d\theta} = -a \sin \theta, \frac{dy}{d\theta} = b \cos \theta$$

$$\Rightarrow \frac{dy}{dx} = \frac{\frac{dy}{d\theta}}{\frac{dx}{d\theta}} = \frac{b \cos \theta}{-a \sin \theta} = -\frac{b}{a} \cot \theta$$

Differentiating w.r.t. x , we get

$$\begin{aligned} \frac{d^2y}{dx^2} &= \frac{b \operatorname{cosec}^2 \theta}{a} \frac{d\theta}{dx} \\ &= \frac{b \operatorname{cosec}^2 \theta}{a} \left(\frac{-1}{a \sin \theta} \right) \\ &= \frac{-b \operatorname{cosec}^3 \theta}{a^2} \end{aligned}$$

OR

$$\text{Let } y = \sin^2 x, z = e^{\cos x}$$

Differentiating both the functions w.r.t. x , we get

$$\frac{dy}{dx} = 2 \sin x \cos x, \frac{dz}{dx} = e^{\cos x} (-\sin x)$$

$$\Rightarrow \frac{dy}{dz} = \frac{\frac{dy}{dx}}{\frac{dz}{dx}} = \frac{2 \sin x \cos x}{e^{\cos x} (-\sin x)} = \frac{-2 \cos x}{e^{\cos x}}$$

Question 26

Find the value of $\int_0^1 \tan^{-1} \left(\frac{1-2x}{1+x-x^2} \right) dx$.

Solution:

$$I = \int_0^1 \tan^{-1} \left(\frac{1-2x}{1+x-x^2} \right) dx$$

$$I = -\int_0^1 \tan^{-1} \left(\frac{2x-1}{1+x-x^2} \right) dx$$

$$I = -\int_0^1 \tan^{-1} \left(\frac{x+(x-1)}{1-x(x-1)} \right) dx$$

$$I = -\int_0^1 [\tan^{-1} x + \tan^{-1} (x-1)] dx$$

$$I = -\left[\int_0^1 \tan^{-1} (x) dx + \int_0^1 \tan^{-1} (x-1) dx \right]$$

$$I = -\left[\int_0^1 \tan^{-1} (1-x) dx + \int_0^1 \tan^{-1} (x-1) dx \right]$$

$$[\int_0^a f(x) dx = \int_0^a f(a-x) dx]$$

$$I = -\left[\int_0^1 \tan^{-1} (1-x) dx - \int_0^1 \tan^{-1} (1-x) dx \right]$$

$$I = 0$$

Question 27

Solve the equation x : $\sin^{-1}\left(\frac{5}{x}\right) + \sin^{-1}\left(\frac{12}{x}\right) = \frac{\pi}{2}$ ($x \neq 0$).

Solution:

$$\sin^{-1}\left(\frac{5}{x}\right) + \sin^{-1}\left(\frac{12}{x}\right) = \frac{\pi}{2}$$

As we know the following

$$\sin^{-1} x + \cos^{-1} x = \frac{\pi}{2}$$

Therefore,

$$\begin{aligned}\sin^{-1}\left(\frac{5}{x}\right) &= \frac{\pi}{2} - \sin^{-1}\left(\frac{12}{x}\right) \\ &= \cos^{-1}\left(\frac{12}{x}\right)\end{aligned}$$

As we know that $\cos^{-1} x = \sin^{-1} \sqrt{1 - x^2}$

So,

$$\sin^{-1}\left(\frac{5}{x}\right) = \sin^{-1} \sqrt{1 - \left(\frac{12}{x}\right)^2}$$

$$\Rightarrow \left(\frac{5}{x}\right) = \sqrt{1 - \left(\frac{12}{x}\right)^2}$$

$$\Rightarrow \frac{25}{x^2} = 1 - \frac{144}{x^2}$$

$$\Rightarrow \frac{169}{x^2} = 1$$

$$\Rightarrow x = 13 \quad (\because x \text{ can not be negative})$$

Question 28

Find the general solution of the differential equation $ye^{x/y} dx = (xe^{x/y} + y^2) dy$, $y \neq 0$

Solution:

$$ye^{\frac{x}{y}} dx = \left(xe^{\frac{x}{y}} + y^2\right) dy$$

$$\Rightarrow ye^{\frac{x}{y}} dx = xe^{\frac{x}{y}} dy + y^2 dy$$

$$\Rightarrow ye^{\frac{x}{y}} dx - xe^{\frac{x}{y}} dy = y^2 dy$$

$$\Rightarrow (y dx - x dy) e^{\frac{x}{y}} = y^2 dy$$

$$\Rightarrow \frac{(y dx - x dy)}{y^2} e^{\frac{x}{y}} = dy$$

$$\Rightarrow e^{\frac{x}{y}} d\left(\frac{x}{y}\right) = dy$$

$$\Rightarrow \int e^{\frac{x}{y}} d\left(\frac{x}{y}\right) = \int dy$$

$$\Rightarrow e^{\frac{x}{y}} = y + C$$

Question 29

If $y = (\log x)^x + x^{\log x}$, then find $\frac{dy}{dx}$.

Solution:

Given : $y = (\log x)^x + x^{\log x}$

Also, let $u = (\log x)^x$ and $v = x^{\log x}$

$$\therefore y = u + v$$

$$\Rightarrow \frac{dy}{dx} = \frac{du}{dx} + \frac{dv}{dx} \quad \dots\dots (1)$$

Now, $u = (\log x)^x$

$$\Rightarrow \log u = \log [(\log x)^x]$$

$$\Rightarrow \log u = x \log (\log x)$$

Differentiating both sides with respect to x ,

$$\frac{1}{u} \frac{du}{dx} = \log (\log x) \frac{d}{dx} (x) + x \frac{d}{dx} [\log (\log x)]$$

$$\Rightarrow \frac{du}{dx} = u \left[\log (\log x) + x \frac{1}{\log x} \frac{d}{dx} (\log x) \right]$$

$$\Rightarrow \frac{du}{dx} = (\log x)^x \left[\log (\log x) + \frac{x}{\log x} \times \frac{1}{x} \right]$$

$$\Rightarrow \frac{du}{dx} = (\log x)^x \left[\log (\log x) + \frac{1}{\log x} \right] \quad \dots\dots (2)$$

Also, $v = x^{\log x}$

$$\Rightarrow \log v = \log x^{\log x}$$

$$\Rightarrow \log v = \log x \log x = (\log x)^2$$

Differentiating both sides with respect to x ,

$$\frac{1}{v} \frac{dv}{dx} = \frac{d}{dx} [(\log x)^2]$$

$$\Rightarrow \frac{1}{v} \frac{dv}{dx} = 2 (\log x) \frac{d}{dx} (\log x)$$

$$\Rightarrow \frac{dv}{dx} = 2v (\log x) \frac{1}{x}$$

$$\Rightarrow \frac{dv}{dx} = 2x^{\log x} \frac{\log x}{x} \dots\dots (3)$$

From (1),(2) and (3), we obtain

$$\frac{dy}{dx} = 2x^{\log x} \frac{\log x}{x} + (\log x)^x \left[\log(\log x) + \frac{1}{\log x} \right]$$

Question 30

Three rotten apples are mixed with seven fresh apples. Find the probability distribution of the number of rotten apples, if three apples are drawn one by one with replacement. Find the mean of the number of rotten apples.

OR

In a shop X, 30 tins of ghee of type A and 40 tins of ghee of type B which look alike, are kept for sale. While in shop Y, similar 50 tins of ghee of type A and 60 tins of ghee of type B are there. One tin of ghee is purchased from one of the randomly selected shop and is found to be of type B. Find the probability that it is purchased from shop Y.

Solution:

Let X represents number of rotten apples.

Therefore, $X = 0, 1, 2, 3$

$$P(X = 0) = \frac{7}{10} \times \frac{7}{10} \times \frac{7}{10} = \frac{343}{1000}$$

$$P(X = 1) = {}^3C_1 \times \frac{3}{10} \times \frac{7}{10} \times \frac{7}{10} = 3 \times \frac{147}{1000} = \frac{441}{1000}$$

$$P(X = 2) = {}^3C_2 \times \frac{3}{10} \times \frac{3}{10} \times \frac{7}{10} = 3 \times \frac{63}{1000} = \frac{189}{1000}$$

$$P(X = 3) = {}^3C_3 \times \frac{3}{10} \times \frac{3}{10} \times \frac{3}{10} = \frac{27}{1000}$$

Hence, the required probability distribution is as follows:

X	0	1	2	3
P(X)	$\frac{343}{1000}$	$\frac{441}{1000}$	$\frac{189}{1000}$	$\frac{27}{1000}$

$$\text{Mean of probability distribution} = 0 \times \frac{343}{1000} + 1 \times \frac{441}{1000} + 2 \times \frac{189}{1000} + 3 \times \frac{27}{1000}$$

$$= \frac{441}{1000} + \frac{378}{1000} + \frac{81}{1000} = \frac{900}{1000} = \frac{9}{10}$$

Hence, the required mean is $\frac{9}{10}$.

OR

Given:

	Shop X	Shop Y
Ghee of type A	30 tins	50 tins
Ghee of type B	40 tins	60 tins

We have $P(X) = \frac{1}{2}$, $P(Y) = \frac{1}{2}$, $P(B/X) = \frac{40}{70} = \frac{4}{7}$ and $P(B/Y) = \frac{60}{110} = \frac{6}{11}$

Therefore, $P(Y/B) = \frac{P(Y \cap B)}{P(B)}$

$$= \frac{P(Y) \cdot P(B/Y)}{P(Y) \cdot P(B/Y) + P(X) \cdot P(B/X)}$$

$$= \frac{\frac{1}{2} \times \frac{6}{11}}{\frac{1}{2} \times \frac{6}{11} + \frac{1}{2} \times \frac{4}{7}}$$

$$= \frac{\frac{3}{11}}{\frac{3}{11} + \frac{2}{7}}$$

$$= \frac{3}{11} \times \frac{77}{43} = \frac{21}{43}$$

Hence, the probability that the ghee was purchased from shop Y is $\frac{21}{43}$.

Question 31

A company manufactures two types of novelty souvenirs made of plywood. Souvenirs of type A requires 5 minutes each for cutting and 10 minutes each for assembling. Souvenirs of type B require 8 minutes each for cutting and 8 minutes each for assembling. Given that total time for cutting is 3 hours 20 minutes and for assembling 4 hours. The profit for type A souvenir is ₹ 100 each and for type B souvenir, profit is ₹ 120 each. How many souvenirs of each type should the company manufacture in order to maximize the profit? Formulate the problem as an LPP and solve it graphically.

Solution:

Let the company manufacture x souvenirs of type A and y souvenirs of type B. Number of items cannot be negative.

Therefore,
 $x \geq 0$ and $y \geq 0$

The given information can be compiled in a table as follows.

	Type A	Type B	Availability
Cutting(min)	5	8	$3 \times 60 + 20 = 200$
Assembling(min)	10	8	$4 \times 60 = 240$

Therefore, the constraints are

$$5x + 8y \leq 200$$

$$10x + 8y \leq 240$$

The profit on type A souvenirs is 100 rupees each and on type B souvenirs is 120 rupees

each. Therefore, profit gained on x souvenirs of type A and y souvenirs of type B is Rs $100x$ and Rs $120y$ respectively.

Total profit, $Z = 100x + 120y$

The mathematical formulation of the given problem is
Maximize $Z = 100x + 120y$

subject to the constraints,

$$5x + 8y \leq 200$$

$$10x + 8y \leq 240$$

$$x \geq 0 \text{ and } y \geq 0$$

First we will convert inequations into equations as follows:

$$5x + 8y = 200, 10x + 8y = 240, x = 0 \text{ and } y = 0$$

Region represented by $5x + 8y \leq 200$:

The line $5x + 8y = 200$ meets the coordinate axes at $A_1(40, 0)$ and $B_1(0, 25)$ respectively.

By joining these points we obtain the line $5x + 8y = 200$. Clearly $(0,0)$ satisfies the $5x + 8y = 200$. So, the region which contains the origin represents the solution set of the inequation $5x + 8y \leq 200$.

Region represented by $10x + 8y \leq 240$:

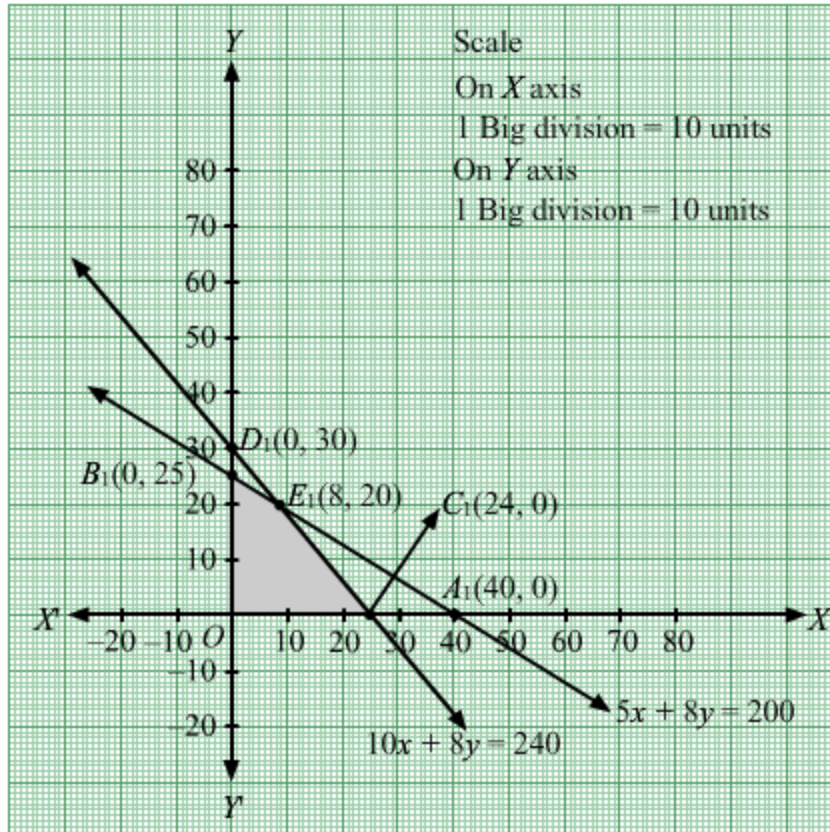
The line $10x + 8y = 240$ meets the coordinate axes at $C_1(24, 0)$ and $D_1(0, 30)$ respectively. By joining these points we obtain the line

$10x + 8y = 240$. Clearly $(0,0)$ satisfies the inequation $10x + 8y \leq 240$. So, the region which contains the origin represents the solution set of the inequation $10x + 8y \leq 240$.

Region represented by $x \geq 0$ and $y \geq 0$:

Since, every point in the first quadrant satisfies these inequations. So, the first quadrant is the region represented by the inequations $x \geq 0$, and $y \geq 0$.

The feasible region determined by the system of constraints $5x + 8y \leq 200$, $10x + 8y \leq 240$, $x \geq 0$ and $y \geq 0$ are as follows.



The corner points of the feasible region are $O(0, 0)$, $B_1(0, 25)$, $E_1(8, 20)$, $C_1(24, 0)$.
The values of Z at these corner points are as follows.

Corner point	$Z = 100x + 120y$
$O(0, 0)$	0
$B_1(0, 25)$	3000
$E_1(8, 20)$	3200
$C_1(24, 0)$	2400

The maximum value of Z is 3200 at $E_1(8, 20)$.

Thus, 8 souvenirs of type A and 20 souvenirs of type B should be produced each day to get the maximum profit of Rs 3200.

Question 32

If $\vec{a} = \hat{i} + 2\hat{j} + 3\hat{k}$ and $\vec{b} = 2\hat{i} + 4\hat{j} - 5\hat{k}$ represent two adjacent sides of a parallelogram, find unit vectors parallel to the diagonals of the parallelogram.

OR

Using vectors, find the area of the triangle ABC with vertices $A(1, 2, 3)$, $B(2, -1, 4)$ and $C(4, 5, -1)$.

Solution:

Given, $\vec{a} = \hat{i} + 2\hat{j} + 3\hat{k}$ and $\vec{b} = 2\hat{i} + 4\hat{j} - 5\hat{k}$ represent two adjacent sides of a parallelogram.

Then, $(\vec{a} + \vec{b})$ and $(\vec{a} - \vec{b})$ represent diagonals of the parallelogram.

$$(\vec{a} + \vec{b}) = (\hat{i} + 2\hat{j} + 3\hat{k}) + (2\hat{i} + 4\hat{j} - 5\hat{k}) = 3\hat{i} + 6\hat{j} - 2\hat{k} \text{ and}$$

$$(\vec{a} - \vec{b}) = (\hat{i} + 2\hat{j} + 3\hat{k}) - (2\hat{i} + 4\hat{j} - 5\hat{k}) = -\hat{i} - 2\hat{j} + 8\hat{k}$$

$$|\vec{a} + \vec{b}| = \sqrt{3^2 + 6^2 + (-2)^2} = 7 \text{ and } |\vec{a} - \vec{b}| = \sqrt{(-1)^2 + (-2)^2 + (8)^2} = \sqrt{69}$$

Let \vec{c} and \vec{d} be the unit vectors parallel to the diagonals of the parallelogram respectively.

$$\text{Then, } \vec{c} = \frac{(\vec{a} + \vec{b})}{|\vec{a} + \vec{b}|} \text{ and } \vec{d} = \frac{(\vec{a} - \vec{b})}{|\vec{a} - \vec{b}|}$$

$$\Rightarrow \vec{c} = \frac{3\hat{i} + 6\hat{j} - 2\hat{k}}{7} \text{ and } \vec{d} = \frac{-\hat{i} - 2\hat{j} + 8\hat{k}}{\sqrt{69}}$$

OR

Given, $A(1, 2, 3)$, $B(2, -1, 4)$ and $C(4, 5, -1)$ are the vertices of triangle ABC .

Then, $\vec{AB} = (2-1)\hat{i} + (-1-2)\hat{j} + (4-3)\hat{k} = \hat{i} - 3\hat{j} + \hat{k}$ and $\vec{AC} = (4-1)\hat{i} + (5-2)\hat{j} + (-1-3)\hat{k} = 3\hat{i} + 3\hat{j} - 4\hat{k}$

Area of $\Delta ABC = \frac{1}{2} |\vec{AB} \times \vec{AC}|$

$$= \frac{1}{2} \begin{vmatrix} \hat{i} & \hat{j} & \hat{k} \\ 1 & -3 & 1 \\ 3 & 3 & -4 \end{vmatrix}$$

$$= \frac{1}{2} |(12-3)\hat{i} - (-4-3)\hat{j} + (3+9)\hat{k}|$$

$$= \frac{1}{2} |9\hat{i} + 7\hat{j} + 12\hat{k}|$$

$$= \frac{1}{2} \sqrt{9^2 + 7^2 + 12^2}$$

$$= \frac{1}{2} \sqrt{274} \text{ sq. units}$$

Question 33

Find the distance of the point $P(3, 4, 4)$ from the point, where the line joining the points $A(3, -4, -5)$ and $B(2, -3, 1)$ intersects the plane $2x + y + z = 7$.

Solution:

The equation of the line passing through the points $A(3, -4, -5)$ and $B(2, -3, 1)$ is given by

$$\frac{x-3}{2-3} = \frac{y-(-4)}{-3-(-4)} = \frac{z-(-5)}{1-(-5)}$$

$$\Rightarrow \frac{x-3}{-1} = \frac{y+4}{1} = \frac{z+5}{6}$$

The coordinates of any point on the line

$$\frac{x-3}{-1} = \frac{y+4}{1} = \frac{z+5}{6} = \lambda$$

$$\text{are } (-\lambda + 3, \lambda - 4, 6\lambda - 5) \dots\dots (1)$$

If it lies on the plane $2x + y + z = 7$, then

$$2(-\lambda + 3) + (\lambda - 4) + (6\lambda - 5) = 7$$

$$\Rightarrow 5\lambda - 3 = 7$$

$$\Rightarrow 5\lambda = 10$$

$$\Rightarrow \lambda = 2$$

Putting $\lambda = 2$ in (1),

we get $(1, -2, 7)$ as the coordinates of the point of intersection of the given line and plane.

\therefore Required distance = Distance between points $(3, 4, 4)$ and $(1, -2, 7)$

$$= \sqrt{(3-1)^2 + (4+2)^2 + (4-7)^2}$$

$$= \sqrt{4+36+9}$$

$$= \sqrt{49} = 7 \text{ units}$$

Question 34

Find the minimum value of $(ax + by)$, where $xy = c^2$.

Solution:

Given, $f(x) = ax + by$ and $xy = c^2$

$$\text{So } y = \frac{c^2}{x} \dots\dots (1)$$

Putting the value of y in $f(x)$, we get

$$f(x) = ax + b\left(\frac{c^2}{x}\right)$$

To find the minimum value of $f(x)$ put $f'(x) = 0$

$$f'(x) = a - \frac{bc^2}{x^2} = 0$$

$$ax^2 - bc^2 = 0$$

$$x^2 = \frac{bc^2}{a}$$

$$x = c\sqrt{\frac{b}{a}}$$

Putting the value of x in $f(x)$

$$f(x) = ax + b\left(\frac{c^2}{x}\right)$$

$$\begin{aligned} f\left(c\sqrt{\frac{b}{a}}\right) &= ac\sqrt{\frac{b}{a}} + b\left(\frac{c^2}{c\sqrt{\frac{b}{a}}}\right) \\ &= c\sqrt{ab} + c\sqrt{ab} \\ &= 2c\sqrt{ab} \end{aligned}$$

Hence the minimum value of $(ax + by)$ is $2c\sqrt{ab}$.

Question 35

If a, b, c are $p^{\text{th}}, q^{\text{th}}$ and r^{th} terms respectively of a G.P, then prove that

$$\begin{vmatrix} \log a & p & 1 \\ \log b & q & 1 \\ \log c & r & 1 \end{vmatrix} = 0$$

OR

If $\mathbf{A} = \begin{bmatrix} 2 & -3 & 5 \\ 3 & 2 & -4 \\ 1 & 1 & -2 \end{bmatrix}$, then find \mathbf{A}^{-1} .

Using \mathbf{A}^{-1} , solve the following system of equations :

$$2x - 3y + 5z = 11$$

$$3x + 2y - 4z = -5$$

$$x + y - 2z = -3$$

Solution:

Let x and y are the first term and common ratio respectively.

Then

$$a = a_p = xy^{p-1}, \dots(1)$$

$$b = a_q = xy^{q-1} \dots(2) \text{ and}$$

$$c = a_r = xy^{r-1} \dots(3)$$

Dividing (2) by (1), we get

$$\frac{b}{a} = \frac{y^{q-1}}{y^{p-1}} = y^{q-p} \Rightarrow \log\left(\frac{b}{a}\right) = (q-p) \log y \dots(4)$$

Dividing (3) by (2), we get

$$\frac{c}{b} = \frac{y^{r-1}}{y^{q-1}} = y^{r-q} \Rightarrow \log\left(\frac{c}{b}\right) = (r-q) \log y \dots(5)$$

Dividing (1) by (3), we get

$$\frac{a}{c} = \frac{y^{p-1}}{y^{r-1}} = y^{p-r} \Rightarrow \log\left(\frac{a}{c}\right) = (p-r) \log y \dots(6)$$

Now,

$$\begin{vmatrix} \log a & p & 1 \\ \log b & q & 1 \\ \log c & r & 1 \end{vmatrix}$$

Expanding along C_1 ,

$$\begin{aligned} &= \log a(q-r) - \log b(p-r) + \log c(p-q) \\ &= q \log a - r \log a - p \log b + r \log b + p \log c - q \log c \\ &= q(\log a - \log c) + p(\log c - \log b) + r(\log b - \log a) \\ &= q \log \left(\frac{a}{c}\right) + p \log \left(\frac{c}{b}\right) + r \log \left(\frac{b}{a}\right) \\ &= q(p-r) \log y + p(r-q) \log y + r(q-p) \log y \quad \{\text{from (4), (5) and (6)}\} \\ &= \log y(pq - qr + pr - pq + qr - pr) \\ &= 0 \end{aligned}$$

Hence proved.

OR

Now, $A_{11} = 0, A_{12} = 2, A_{13} = 1$

$$A_{21} = -1, A_{22} = -9, A_{23} = -5$$

$$A_{31} = 2, A_{32} = 23, A_{33} = 13$$

$$\therefore A^{-1} = \frac{1}{|A|}(\text{adj}A) = - \begin{bmatrix} 0 & -1 & 2 \\ 2 & -9 & 23 \\ 1 & -5 & 13 \end{bmatrix} = \begin{bmatrix} 0 & 1 & -2 \\ -2 & 9 & -23 \\ -1 & 5 & -13 \end{bmatrix} \quad \dots(1)$$

Now, the given system of equations can be written in the form of $AX = B$, where

The solution of the system of equations is given by $X = A^{-1}B$.

$$X = A^{-1}B$$

$$\begin{aligned} \Rightarrow \begin{bmatrix} x \\ y \\ z \end{bmatrix} &= \begin{bmatrix} 0 & 1 & -2 \\ -2 & 9 & -23 \\ -1 & 5 & -13 \end{bmatrix} \begin{bmatrix} 11 \\ -5 \\ -3 \end{bmatrix} \quad [\text{Using (1)}] \\ &= \begin{bmatrix} 0 - 5 + 6 \\ -22 - 45 + 69 \\ -11 - 25 + 39 \end{bmatrix} \\ &= \begin{bmatrix} 1 \\ 2 \\ 3 \end{bmatrix} \end{aligned}$$

Hence, $x = 1, y = 2$, and $z = 3$.



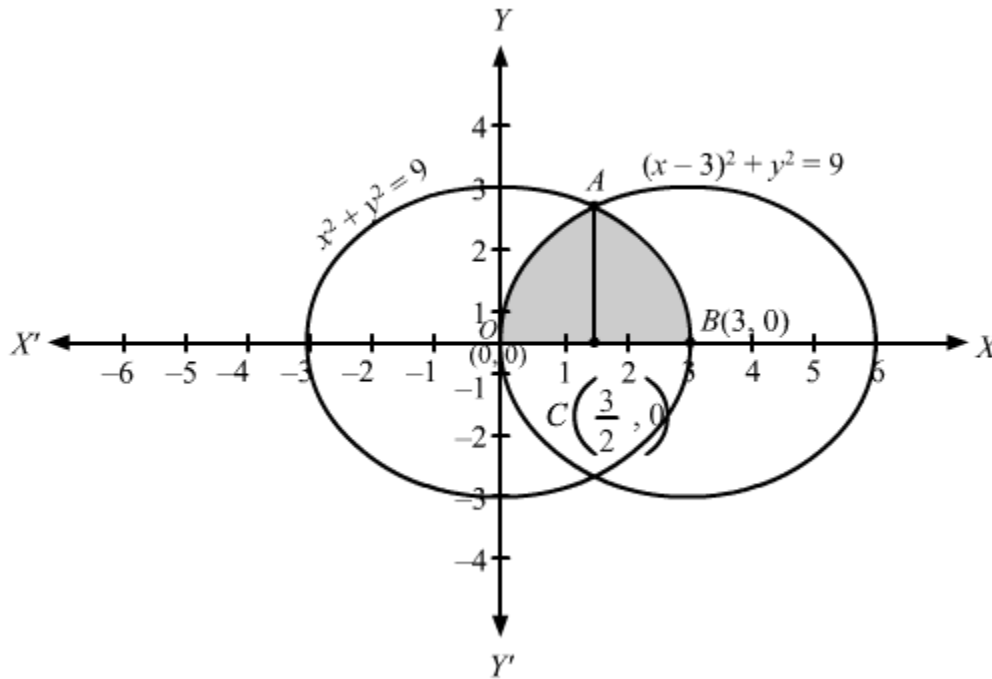
Question 36

Using integration find the area of the region bounded between the two circles $x^2 + y^2 = 9$ and $(x - 3)^2 + y^2 = 9$.

OR

Evaluate the following integral as the limit of sums $\int_1^4 (x^2 - x) dx$.

Solution:



Let the two curves be named as y_1 and y_2 where

$$y_1 : (x - 3)^2 + y^2 = 9 \quad \dots\dots(1)$$

$$y_2 : x^2 + y^2 = 9 \quad \dots\dots(2)$$

The curve $x^2 + y^2 = 9$ represents a circle with centre $(0, 0)$ and the radius is 3.

The curve $(x - 3)^2 + y^2 = 9$ represents a circle with centre $(3, 0)$ and has a radius 3.

To find the intersection points of two curves equate them.

On solving (1) and (2) we get

$$x = \frac{3}{2} \text{ and } y = \pm \frac{3\sqrt{3}}{2}$$

Therefore, intersection points are $\left(\frac{3}{2}, \frac{3\sqrt{3}}{2}\right)$ and $\left(\frac{3}{2}, -\frac{3\sqrt{3}}{2}\right)$.

Now, the required area = $2[\text{area}(OACO) + \text{area}(CABC)]$

Here,

$$\text{Area}(OACO) = \int_0^{\frac{3}{2}} y_1 dx$$

$$= \int_0^{\frac{3}{2}} \sqrt{9 - (x - 3)^2} dx$$

And

$$\begin{aligned}\text{Area}(CABC) &= \int_{\frac{3}{2}}^3 y_2 \cdot dx \\ &= \int_{\frac{3}{2}}^3 \sqrt{9-x^2} dx\end{aligned}$$

Thus the required area is given by,

$$A = 2[\text{area}(OACO) + \text{area}(CABC)]$$

$$\begin{aligned}&= 2 \left(\int_0^{\frac{3}{2}} \sqrt{9-(x-3)^2} dx + \int_{\frac{3}{2}}^3 \sqrt{9-x^2} dx \right) \\ &= 2 \left[\left(\frac{x-3}{2} \sqrt{9-(x-3)^2} + \frac{9}{2} \sin^{-1} \left(\frac{x-3}{3} \right) \right) \Big|_0^{\frac{3}{2}} + 2 \left[\frac{x}{2} \sqrt{9-x^2} + \frac{9}{2} \sin^{-1} \left(\frac{x}{3} \right) \right] \Big|_{\frac{3}{2}}^3 \right] \\ &= 2 \left[\left(\frac{\frac{3}{2}-3}{2} \sqrt{9-\left(\frac{3}{2}-3\right)^2} + \frac{9}{2} \sin^{-1} \left(\frac{\frac{3}{2}-3}{3} \right) \right) - \frac{0-3}{2} \sqrt{9-(0-3)^2} - \frac{9}{2} \sin^{-1} \left(\frac{0-3}{3} \right) \right] \\ &\quad + 2 \left[\left(\frac{3}{2} \sqrt{9-3^2} + \frac{9}{2} \sin^{-1} \left(\frac{3}{3} \right) \right) - \left(\frac{3}{4} \sqrt{9-\frac{9}{4}} \right) - \frac{9}{2} \sin^{-1} \left(\frac{\frac{3}{2}}{3} \right) \right] \\ &= 2 \left[-\frac{9\sqrt{3}}{8} - \frac{9\pi}{12} + \frac{9\pi}{4} \right] + 2 \left[\frac{9\pi}{4} - \frac{9\sqrt{3}}{8} - \frac{9\pi}{12} \right] \\ &= -\frac{18\sqrt{3}}{8} - \frac{18\pi}{12} + \frac{18\pi}{4} + \frac{18\pi}{4} - \frac{18\sqrt{3}}{8} - \frac{18\pi}{12} \\ &= -\frac{36\sqrt{3}}{8} - \frac{36\pi}{12} + \frac{36\pi}{4} \\ &= -\frac{9\sqrt{3}}{2} - 3\pi + 9\pi \\ &= 6\pi - \frac{9\sqrt{3}}{2}\end{aligned}$$

Hence the required area is $\left(6\pi - \frac{9\sqrt{3}}{2}\right)$ square units.

OR

$$\begin{aligned}\text{Let } I &= \int_1^4 (x^2 - x) dx \\ &= \int_1^4 x^2 dx - \int_1^4 x dx\end{aligned}$$

$$\text{Let } I = I_1 - I_2, \text{ where } I_1 = \int_1^4 x^2 dx \text{ and } I_2 = \int_1^4 x dx \quad \dots(1)$$

It is known that,

$$\int_a^b f(x) dx = (b-a) \lim_{n \rightarrow \infty} \frac{1}{n} [f(a) + f(a+h) + \dots + f(a+(n-1)h)], \text{ where } h = \frac{b-a}{n}$$

$$\text{For } I_1 = \int_1^4 x^2 dx,$$

$$a=1, b=4, \text{ and } f(x) = x^2$$

$$\therefore h = \frac{4-1}{n} = \frac{3}{n}$$

$$\begin{aligned}
I_1 &= \int_1^4 x^2 dx = (4-1) \lim_{n \rightarrow \infty} \frac{1}{n} [f(1) + f(1+h) + \dots + f(1+(n-1)h)] \\
&= 3 \lim_{n \rightarrow \infty} \frac{1}{n} \left[1^2 + \left(1 + \frac{3}{n}\right)^2 + \left(1 + 2 \cdot \frac{3}{n}\right)^2 + \dots + \left(1 + \frac{(n-1)3}{n}\right)^2 \right] \\
&= 3 \lim_{n \rightarrow \infty} \frac{1}{n} \left[1^2 + \left\{ 1^2 + \left(\frac{3}{n}\right)^2 + 2 \cdot \frac{3}{n} \right\} + \dots + \left\{ 1^2 + \left(\frac{(n-1)3}{n}\right)^2 + \frac{2 \cdot (n-1) \cdot 3}{n} \right\} \right] \\
&= 3 \lim_{n \rightarrow \infty} \frac{1}{n} \left[\left(1^2 + \dots + 1^2\right) + \left(\frac{3}{n}\right)^2 \{1^2 + 2^2 + \dots + (n-1)^2\} + 2 \cdot \frac{3}{n} \{1 + 2 + \dots + (n-1)\} \right] \\
&= 3 \lim_{n \rightarrow \infty} \frac{1}{n} \left[n + \frac{9}{n^2} \left\{ \frac{(n-1)(n)(2n-1)}{6} \right\} + \frac{6}{n} \left\{ \frac{(n-1)(n)}{2} \right\} \right] \\
&= 3 \lim_{n \rightarrow \infty} \frac{1}{n} \left[n + \frac{9n}{6} \left(1 - \frac{1}{n}\right) \left(2 - \frac{1}{n}\right) + \frac{6n-6}{2} \right] \\
&= 3 \lim_{n \rightarrow \infty} \left[1 + \frac{9}{6} \left(1 - \frac{1}{n}\right) \left(2 - \frac{1}{n}\right) + 3 - \frac{3}{n} \right] \\
&= 3[1 + 3 + 3] \\
&= 3[7]
\end{aligned}$$

$$I_1 = 21 \quad \dots(2)$$

$$\text{For } I_2 = \int_1^4 x dx,$$

$$a = 1, b = 4, \text{ and } f(x) = x$$

$$\Rightarrow h = \frac{4-1}{n} = \frac{3}{n}$$

$$\begin{aligned}
\therefore I_2 &= (4-1) \lim_{n \rightarrow \infty} \frac{1}{n} [f(1) + f(1+h) + \dots + f(a+(n-1)h)] \\
&= 3 \lim_{n \rightarrow \infty} \frac{1}{n} [1 + (1+h) + \dots + (1+(n-1)h)] \\
&= 3 \lim_{n \rightarrow \infty} \frac{1}{n} \left[1 + \left(1 + \frac{3}{n}\right) + \dots + \left\{ 1 + (n-1) \frac{3}{n} \right\} \right] \\
&= 3 \lim_{n \rightarrow \infty} \frac{1}{n} \left[\left(1 + 1 + \dots + 1\right) + \frac{3}{n} (1 + 2 + \dots + (n-1)) \right]
\end{aligned}$$

$$\begin{aligned}
&= 3 \lim_{n \rightarrow \infty} \frac{1}{n} \left[n + \frac{3}{n} \left\{ \frac{(n-1)n}{2} \right\} \right] \\
&= 3 \lim_{n \rightarrow \infty} \left[1 + \frac{3}{2} \left\{ 1 - \frac{1}{n} \right\} \right] \\
&= 3 \left[1 + \frac{3}{2} \right] \\
&= 3 \left[\frac{5}{2} \right] \\
\Rightarrow I_2 &= \frac{15}{2} \qquad \dots (3)
\end{aligned}$$

From equations (2) and (3), we obtain

$$I = I_1 + I_2 = 21 - \frac{15}{2} = \frac{27}{2}$$